

Vaje

1. Poimenuj tonska trajanja.

















2. Poimenuj tonske višine.



3. Poimenuj lestvici.



4. Pred noto dopiši pravilni predznak (višaj ali nižaj – glej ime).



A musical staff in treble clef with 14 notes. Below each note is a letter name: fis, b, cis, ges, es, ais, des, b, eis, ais, fes, ces, dis. The notes are: G4 (quarter), B4 (quarter), C5 (quarter), G4 (quarter), E4 (quarter), A4 (quarter), D5 (quarter), B4 (quarter), E4 (quarter), A4 (quarter), F5 (quarter), C5 (quarter), C5 (quarter), D5 (quarter).


5. Napiši razdaljo med toni (polton ali cel ton).



Two musical staves in treble clef. The first staff contains 14 notes: C4, D4, E4, F4, G4, A4, B4, C5, B4, A4, G4, F4, E4, D4. The second staff contains 14 notes: D4, E4, F4, G4, A4, B4, C5, B4, A4, G4, F4, E4, D4, C4.


6. Napiši lestvico.

D-dur




An empty musical staff in treble clef for writing the D major scale.

F-dur



An empty musical staff in treble clef for writing the F major scale.

C-dur



An empty musical staff in treble clef for writing the C major scale.