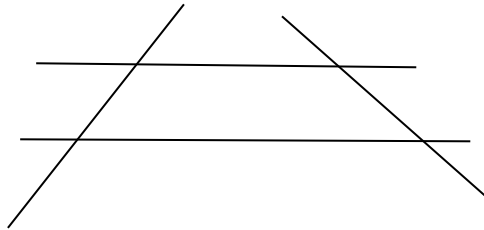


MATEMATIKA – 9. URA: GEOMETRIJA


Prepiši naloge v zvezek in reši.

Označi presečišča črt in jih poimenuj.




Nariši ravno in krivo črto, ki se sekata v treh točkah. Točke označi in poimenuj.

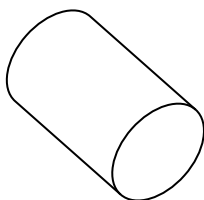
Poveži točki **A** in **C** z ravno črto, točki **B** in **D** pa s krivo črto. Črti naj se sekata v treh točkah. Točke označi in poimenuj.



Poimenuj narisano. Poveži.



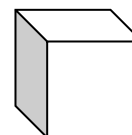
\_\_\_\_\_



\_\_\_\_\_



\_\_\_\_\_



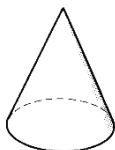
\_\_\_\_\_

GEOMETRIJSKO TELO

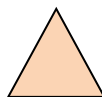
GEOMETRIJSKI LIK



\_\_\_\_\_



\_\_\_\_\_



\_\_\_\_\_



\_\_\_\_\_