


SLOVENSKI KRAJI

Reši spodnje rebuse in dobil boš imena slovenskih krajev.



(-Č)



(S=D, -A)



(T = N, + A)

Rešitev:




(P = B)




(P = N)

Rešitev:



(S = N)



(S = R)



(-P, L = C)

Rešitev:
